

SECTION 1 -

Question No.1 (Question Id - 137084)

Marks: 4.00

Given below are two Statements: one is labelled as Assertion A and the other is labelled as Reason R

Assertion A: Moon cannot be used as a satellite for communication.

Reason R: Moon doesnot move in the equatorial plane of the earth.

In the light of the above statements, choose the most appropriate answer from the options given below

- (1) Both A and R are correct and R is the correct explanation of A
- (2) Both A and R are correct and R is NOT the correct explanation of A
- (3) A is correct but R is not correct
- (4) A is not correct but R is correct

- (1) 1
- (2) 2 (Chosen option)
- (3) 3
- (4) 4

Question No.2 (Question Id - 137055)

Marks: 4.00

The most clean village of the World is:

- (1) Pengliburan, Bali, Indonesia
- (2) Mawlynnong, Meghalaya, India
- (3) Indore, M.P. India
- (4) Madrid, Spain

- (1) 1
- (2) 2
- (3) 3
- (4) 4

Question No.3 (Question Id - 137115)

Marks: 4.00

Match List - I with List - II

List I
List II (Angle both hours hand
& minimum hours)

- | | |
|------------|--------------------------------|
| A. 1.10 pm | (I) 20° |
| B. 2.15 pm | (II) $22 \frac{1}{2}^{\circ}$ |
| C. 8.40 pm | (III) $47 \frac{1}{2}^{\circ}$ |
| D. 3.25 pm | (IV) 25° |

Choose the correct answer from the options given below:

(1) A-IV, B-II, C-I, D-III

(2) A-II, B-III, C-IV, D-I

(3) A-I, B-II, C-III, D-IV

(4) A-III, B-II, C-I, D-IV

- (1) 1
(2) 2
(3) 3
(4) 4 (Chosen option)

Question No.4 (Question Id - 137051)

Marks: 4.00

Third Indian Agricultural Research Institute is proposed to be established in:

(1) Assam

(2) Chhatisgarh

(3) Maharashtra

(4) Arunachal Pradesh

- (1) 1
(2) 2
(3) 3
(4) 4

Question No.5 (Question Id - 137097)

Marks: 4.00

Match List - I with List - II

List I

- A. A plane figure bounded by three lines is
- B. A triangle whose all the three sides are of different length
- C. A triangle whose two sides are equal.
- D. The square of one side is equal to the sum of two other sides square

List II

- (I) Scalene triangle
- (II) Isosecles triangle
- (III) Right angle triangle
- (IV) Triangle

Choose the correct answer from the options given below:

(1) A-II, B-I, C-III, D-IV

(2) A-I, B-II, C-III, D-IV

(3) A-IV, B-I, C-II, D-III

(4) A-IV, B-II, C-I, D-III

(1) 1

(2) 2

(3) 3 (Chosen option)

(4) 4

Question No.6 (Question Id - 137064)

Marks: 4.00

Which one is not included within the meaning of word "Law" under Article 13 of the Indian Constitution?

(1) Ordinance

(2) Rule

(3) Judicial Decision

(4) Custom

(1) 1

(2) 2

(3) 3

(4) 4 (Chosen option)

Question No.7 (Question Id - 137103)

Marks: 4.00

Sum of present ages of Ramu and Rahim is 76 yrs however 6 years ago the ratio of their ages was 3:5 respectively. What will be ratio of ages of Ramu and Rahim four years hence?

(1) 22:27

(2) 14:28

(3) 17:25

(4) 14:19

- (1) 1
(2) 2
(3) 3
(4) 4

Question No.8 (Question Id - 137082)

Marks: 4.00

If A is B's sister, C is B's mother, D is C's father and E is D's mother, then how is A related to D?

(1) Grand daughter

(2) Daughter

(3) Aunt

(4) Father

- (1) 1 (Chosen option)
(2) 2
(3) 3
(4) 4

Question No.9 (Question Id - 137014)

Marks: 4.00

The book 'Origin of Species' was written by:

(1) Aristotle

(2) Robert Brown

(3) Charles Darwin

(4) Robert Hooke

- (1) 1
(2) 2
(3) 3 (Chosen option)
(4) 4

Question No.10 (Question Id - 137043)

Marks: 4.00

The expression 'nudum pactum' means:

- (1) Without consideration
- (2) Without agreement
- (3) Without territorial jurisdiction
- (4) Without statutory authority

- (1) 1 (Chosen option)
- (2) 2
- (3) 3
- (4) 4

Question No.11 (Question Id - 137112)

Marks: 4.00

$617+6.017+0.617+6.0017=?$

- (1) 6.2963
- (2) 62.965
- (3) 629.6357
- (4) None of the these

- (1) 1
- (2) 2
- (3) 3 (Chosen option)
- (4) 4

Question No.12 (Question Id - 137085)

Marks: 4.00

You are playing in your friend's house when he gets stuck with a naked electric wire. You would:

- (1) hold him by the arms and try to set him free
- (2) hold the wire and pull it away
- (3) pull off the wire with a wooden stick
- (4) send for the doctor

- (1) 1
- (2) 2
- (3) 3 (Chosen option)

(4) 4

Question No.13 (Question Id - 137070)

Marks: 4.00

The exclusive power to make law with respect to any matter enumerated in List I of the Seventh Schedule of the Indian Constitution lies with the:

- (1) Union Parliament
- (2) State Legislature
- (3) Parliament and State Legislature Both
- (4) Discretion of the President of India

(1) 1 (Chosen option)
(2) 2
(3) 3
(4) 4

Question No.14 (Question Id - 137032)

Marks: 4.00

The term 'a fortiori' means:

- (1) From a stronger reason
- (2) Without any basis
- (3) Lacks merit
- (4) Does not exist

(1) 1
(2) 2
(3) 3
(4) 4

Question No.15 (Question Id - 137067)

Marks: 4.00

The provision for creation of the National Commission for Other Backward Classes(OBC) was made by which Amendment in the Constitution?

- (1) 102nd
- (2) 103rd
- (3) 123rd
- (4) 130th

(1) 1 (Chosen option)
(2) 2

(3) 3

(4) 4

Question No.16 (Question Id - 137035)

Marks: 4.00

The term 'coram non judice' means:

(1) Before one who is not the Judge

(2) Lack of quoram

(3) The matter is under judicial consideration

(4) The matter decided by the Court

(1) 1 (Chosen option)

(2) 2

(3) 3

(4) 4

Question No.17 (Question Id - 137026)

Marks: 4.00

The island state of Australia is

(1) Victoria

(2) Queensland

(3) Tasmania

(4) New South wales

(1) 1

(2) 2

(3) 3

(4) 4

Question No.18 (Question Id - 137113)

Marks: 4.00

A is 10 miles west of B. C is 30 miles north of B. D is 20 miles east of C. What is the distance from A to D?

(1) 10 miles

(2) 30 miles

(3) $30\sqrt{2}$ miles

(4) $10\sqrt{2}$ miles

(1) 1

- (2) 2
- (3) 3
- (4) 4

Question No.19 (Question Id - 137058)

Marks: 4.00

The name of Chenani Nashri Tunnel is:

- (1) Atal Bihari Bajpai Tunnel
- (2) Dr. Shyama Prasad Mukherjee Tunnel
- (3) Subhas Chandra Bose Tunnel
- (4) Swami Vivekanand Tunnel

- (1) 1
- (2) 2
- (3) 3
- (4) 4

Question No.20 (Question Id - 137022)

Marks: 4.00

With which country did India sign the Panchsheel Agreement in 1954?

- (1) Pakistan
- (2) Nepal
- (3) China
- (4) Sri Lanka

- (1) 1
- (2) 2
- (3) 3
- (4) 4

Question No.21 (Question Id - 137108)

Marks: 4.00

Given below are two Statements:

Statement I: 99 is prime number

Statement II: 97 is prime number

In the light of the above statements, choose the most appropriate answer from the options given below

- (1) Both Statement I and Statement II are correct
- (2) Both Statement I and Statement II are incorrect
- (3) Statement I is correct but Statement II is incorrect
- (4) Statement I is incorrect but Statement II is correct

- (1) 1
- (2) 2
- (3) 3
- (4) 4 (Chosen option)

Question No.22 (Question Id - 137088)

Marks: 4.00

If the value of $40-10=400$, and $10\div 10=20$, $6\times 2=4$, then what will be the value of $200-10\times 1000\div 500+100\times 10$

- (1) 20
- (2) -5
- (3) 0
- (4) 995

- (1) 1
- (2) 2
- (3) 3
- (4) 4 (Chosen option)

Question No.23 (Question Id - 137024)

Marks: 4.00

World's longest river is

- (1) Amazon
- (2) Mississippi
- (3) Nile
- (4) Brahmaputra

- (1) 1
- (2) 2
- (3) 3 (Chosen option)
- (4) 4

Question No.24 (Question Id - 137116)

Marks: 4.00

Given below are two Statements: one is labelled as Assertion A and the other is labelled as Reason R

Assertion A: L.C.M of $\frac{2}{3}$, $\frac{8}{9}$, $\frac{10}{27}$ and $\frac{16}{81}$ is $\frac{80}{3}$

Reason R: L.C.M of fractional numbers can be derived by taking the L.C.M of numerator and H.C.F. of denominator

In the light of the above statements, choose the most appropriate answer from the options given below

(1) Both A and R are correct and R is the correct explanation of A

(2) Both A and R are correct and R is NOT the correct explanation of A

(3) A is correct but R is not correct

(4) A is not correct but R is correct

(1) 1

(2) 2 (Chosen option)

(3) 3

(4) 4

Question No.25 (Question Id - 137092)

Marks: 4.00

Given below are two Statements: one is labelled as Assertion A and the other is labelled as Reason R

Assertion A: The perpendicular from the centre to a chord bisect a chord.

Reason R: If the diameter of a circle bisects each of the two chords of a circle, the chords are equal.

In the light of the above statements, choose the most appropriate answer from the options given below

(1) Both A and R are correct and R is the correct explanation of A

(2) Both A and R are correct and R is NOT the correct explanation of A

(3) A is correct but R is not correct

(4) A is not correct but R is correct

(1) 1 (Chosen option)

(2) 2

(3) 3

(4) 4

Question No.26 (Question Id - 137077)

Marks: 4.00

Four positions of a single dice are given.
The digit at the face opposite to the face having digit 6 is

(1) 4

(2) 5

(3) 1

(4) 2

(1) 1

(2) 2

(3) 3

(4) 4

Question No.27 (Question Id - 137023)

Marks: 4.00

Kalahari desert is located in

(1) Central USA

(2) Australia

(3) North Asia

(4) South of Sahara

(1) 1

(2) 2

(3) 3

(4) 4

Question No.28 (Question Id - 137042)

Marks: 4.00

Under which legislation the terrorist activities in India are being presently dealt with?

(1) TADA

(2) POTA

(3) NIA

(4) UAPA

(1) 1 (Chosen option)

(2) 2

(3) 3

(4) 4

Question No.29 (Question Id - 137003)

Marks: 4.00

The book entitled 'The India Story' has been authored by:

(1) Shati Kanta Das

(2) Bimal Jalan

(3) Amartya Sen

(4) Raghuram Rajan

- (1) 1
(2) 2 (Chosen option)
(3) 3
(4) 4

Question No.30 (Question Id - 137031)

Marks: 4.00

Which of the following is not a transfer of property?

(1) Will

(2) Lease

(3) Mortgage

(4) Exchange

- (1) 1 (Chosen option)
(2) 2
(3) 3
(4) 4

Question No.31 (Question Id - 137114)

Marks: 4.00

On what dates of July 2004 did Monday fall?

(1) 1st, 8th, 15th and 22nd

(2) 5th, 12th, 19th and 26th

(3) 4th, 12th, 20th and 27th

(4) None of these

- (1) 1
(2) 2
(3) 3
(4) 4

Question No.32 (Question Id - 137062)

Marks: 4.00

The Schedule I of the Constitution of India provides the list of:

- (1) The administration of Tribal areas
- (2) Allocation of Seats in the Council of States
- (3) Forms of Oath or Affirmation
- (4) The States comprising Union of India

- (1) 1
- (2) 2
- (3) 3
- (4) 4 (Chosen option)

Question No.33 (Question Id - 137120)

Marks: 4.00

What will be the value of a true discount of Rs.930 due 3 years hence at 8% per annum?

- (1) Rs.280
- (2) Rs.180
- (3) Rs.200
- (4) Rs.450

- (1) 1
- (2) 2
- (3) 3
- (4) 4

Question No.34 (Question Id - 137099)

Marks: 4.00

Price of an article is first increase by 20% but later on it was decreased by 20%. What is net percentage change in final price of article?

- (1) 1% decrease
- (2) 3% decrease
- (3) 4% decrease
- (4) 5% decrease

- (1) 1
- (2) 2
- (3) 3 (Chosen option)
- (4) 4

Namita leaves from her home. She first walks 30 kilometres in North-West direction and then 30 Kilometres in South-West direction. Next, she walks 30 Kilometres in South-East direction. Finally, she turns towards her home. In which direction is she moving?

(1) South-East

(2) South-West

(3) North-East

(4) North-West

- (1) 1 (Chosen option)
(2) 2
(3) 3
(4) 4

Given below are two Statements: one is labelled as Assertion A and the other is labelled as Reason R

Assertion A:

While 'B' was in deep sleep, 'A' having a revolver in his hand and pointing it towards 'B' removed valuables from B's body. 'A' has committed the offence of extortion.

Reason R:

Putting a person in fear of injury and thereby dishonestly inducing the person put in fear of deliver the valuable commits the offence of extortion.

In the light of the above statements, choose the most appropriate answer from the options given below

(1) Both A and R are correct and R is the correct explanation of A

(2) Both A and R are correct but R is NOT the correct explanation of A

(3) A is correct but R is not correct

(4) A is correct but R is not correct

- (1) 1
(2) 2
(3) 3
(4) 4 (Chosen option)

Question No.37 (Question Id - 137094)

Marks: 4.00

Given below are two Statements: one is labelled as Assertion A and the other is labelled as Reason R

Assertion A: If Ram earns 100/3% more than Rahim, then Rahim earn 25% less than Ram.

Reason R: If A is R% more than B, then B is less than A by $[R/(100+R)]*100\%$.

In the light of the above statements, choose the most appropriate answer from the options given below

- (1) Both A and R are correct and R is the correct explanation of A
- (2) Both A and R are correct and R is NOT the correct explanation of A
- (3) A is correct but R is not correct
- (4) A is not correct but R is correct

- (1) 1
- (2) 2
- (3) 3
- (4) 4 (Chosen option)

Question No.38 (Question Id - 137089)

Marks: 4.00

D is K's brother. M is K's sister. T is R's father who is M's brother, F is K's mother. At least how many sons do T and F have?

- (1) 2
- (2) 3
- (3) 4
- (4) 5

- (1) 1 (Chosen option)
- (2) 2
- (3) 3
- (4) 4

Question No.39 (Question Id - 137005)

Marks: 4.00

Washing soda is:

- (1) Na_2CO_3
 - (2) $\text{Na}_2\text{CO}_3 \cdot 10\text{H}_2\text{O}$
 - (3) $\text{Na}_2\text{CO}_3 \cdot 5\text{H}_2\text{O}$
 - (4) $\text{Na}_2\text{CO}_3 \cdot 8\text{H}_2\text{O}$
- (1) 1
(2) 2
(3) 3
(4) 4

Question No.40 (Question Id - 137016)

Marks: 4.00

Human Development Index(HDI) is a composite indicator of-

- (1) Income, Health and Education
 - (2) Income, Health and Trade
 - (3) Health, Education and Nutrition
 - (4) None of the above
- (1) 1
(2) 2
(3) 3 (Chosen option)
(4) 4

Question No.41 (Question Id - 137066)

Marks: 4.00

The doctrine of Basic Feature was propounded by the Superme Court in the case of:

- (1) Shankari Prasad Singh v. Union of India
 - (2) Golak Nath v. State of Punjab
 - (3) Keshavanand Bharti v State of Kerala
 - (4) Keshavanand Bharti v State of Kerala
- (1) 1
(2) 2
(3) 3 (Chosen option)
(4) 4

Question No.42 (Question Id - 137098)

Marks: 4.00

A 280 metre long train crosses a platform which is thrice of its length in 50 seconds. What is the speed of the train?

(1) $22 \frac{2}{5}$ m/sec

(2) $24 \frac{1}{5}$ m/sec

(3) $22 \frac{1}{5}$ m/sec

(4) 20 m/sec

(1) 1 (Chosen option)

(2) 2

(3) 3

(4) 4

Question No.43 (Question Id - 137068)

Marks: 4.00

The language which is most recent in Schedule VIII of the Constitution of India:

(1) Bodo

(2) Dogri

(3) Odia

(4) Santhali

(1) 1

(2) 2

(3) 3 (Chosen option)

(4) 4

Question No.44 (Question Id - 137009)

Marks: 4.00

Which of the following is true about DNA

- A. It is major component of chromosome
- B. It performs water transport
- C. It carries genetic information
- D. It performs photosynthesis
- E. It is rectangular in shape

Choose the most appropriate answer from the options given below:

(1) A and E only

(2) A and C only

(3) B and E only

(4) C and D only

- (1) 1
- (2) 2
- (3) 3
- (4) 4

Question No.45 (Question Id - 137034)

Marks: 4.00

The term 'ex post facto' means:

(1) Act done prospectively

(2) Act done retrospectively

(3) No act done

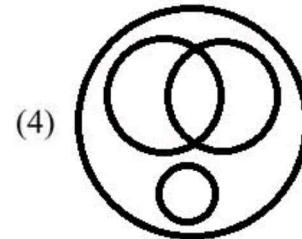
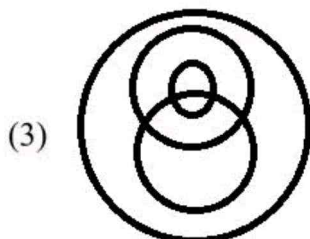
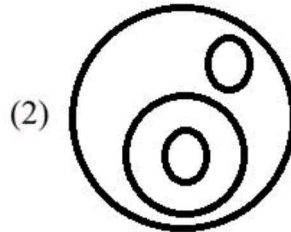
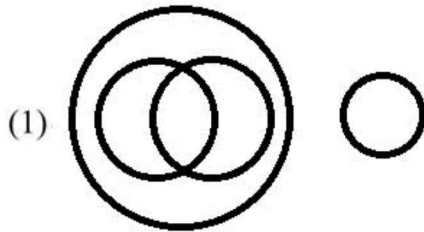
(4) Invalid

- (1) 1
- (2) 2 (Chosen option)
- (3) 3
- (4) 4

Question No.46 (Question Id - 137071)

Marks: 4.00

In a lunch party both chicken and fish were served. Some took only fish and some only chicken. There were some vegetarians who did not accept either. The rest accepted both fish and chicken. Which of the following logic diagrams correctly reflects this situation?



- (1) 1 (Chosen option)
 (2) 2
 (3) 3
 (4) 4

Question No.47 (Question Id - 137033)

Marks: 4.00

The term 'ultra vires' means:

- (1) Beyond power
 (2) Ultra violet rays
 (3) Within competence
 (4) No legal effect

- (1) 1 (Chosen option)
 (2) 2
 (3) 3
 (4) 4

Question No.48 (Question Id - 137015)

Marks: 4.00

Which of the following statement about Janani Shishu Suraksha Karyakram is/are correct?

- (1) Pregnant women are entitled for free drugs and consumables
- (2) Pregnant women are to be provided free transport from home to institution
- (3) Pregnant women are to be provided with cash assistance
- (4) Only Pregnant women are entitled for free drugs and consumables and Pregnant women are to be provided free transport from home to institution

- (1) 1
- (2) 2
- (3) 3
- (4) 4 (Chosen option)

Question No.49 (Question Id - 137048)

Marks: 4.00

Given below are two Statements: one is labelled as Assertion A and the other is labelled as Reason R

Assertion A: On one dark night 'A' making an unusual sound jumped all of sudden in front of a young girl 'B' and due to which 'B' became unconscious for 10 minutes and became normal afterwards. 'A' will not be liable.

Reason R: Voluntarily causing infirmity amounts to hurt and it is an offence under the Indian Penal Code.

In the light of the above statements, choose the most appropriate answer from the options given below

- (1) Both A and R are correct and R is the correct explanation of A
- (2) Both A and R are correct and R is NOT the correct explanation of A
- (3) A is correct but R is not correct
- (4) A is not correct but R is correct

- (1) 1
- (2) 2
- (3) 3
- (4) 4 (Chosen option)

Question No.50 (Question Id - 137074)

Marks: 4.00

In certain code '256' means 'man is old'; '657' means 'old is gold' and '761' means 'gold is new'. What is meaning of 6?

(1) gold

(2) is

(3) old

(4) man

- (1) 1
(2) 2 (Chosen option)
(3) 3
(4) 4

Question No.51 (Question Id - 137050)

Marks: 4.00

Given below are two Statements: one is labelled as Assertion A and the other is labelled as Reason R

Assertion A:

'A' gave an advertisement to sell his building for Rs.10 Lakh. 'B' comes to 'A' and shows his willingness to purchase the building on the proposed amount of Rs.10 Lakh. 'A' refuses to sell to 'B'. 'A' is not bound to sell the property to 'B'.

Reason R:

'A' did not make an offer rather it was an invitation to make an offer thus 'A' is not legally bound to sell the building to 'B'.

In the light of the above statements, choose the most appropriate answer from the options given below

(1) Both A and R are correct and R is the correct explanation of A

(2) Both A and R are correct but R is NOT the correct explanation of A

(3) A is correct but R is not correct

(4) A is not correct but R is correct

- (1) 1 (Chosen option)
(2) 2
(3) 3
(4) 4

Question No.52 (Question Id - 137073)

Marks: 4.00

if \div means $+$, $-$ means \div , \times means $-$, and $+$ means \times , then obtain the value of $(40 \times 10) - 10 \times 3/4 + 8 \times 2 + 16 \div 2$

(1) 18

(2) 0

(3) 12

(4) 16

(1) 1

(2) 2 (Chosen option)

(3) 3

(4) 4

Question No.53 (Question Id - 137100)

Marks: 4.00

Match List - I with List - II

List I

List II

A. If a certain value P is increased by x% then increased value is equal to

(I) $(100 - x)\%$

B. If a certain value P is decreased by x% then decreased value is equal to

(II) $[x/(100-x)*100]\%$

C. If the price of a commodity increases by x%, then the reduction in consumption so as not to increase the expenditure is

(III) $(100+x)\%$

D. If the price of a commodity decreases by x%, then the increase in consumption so as not to decrease the expenditure is

(IV) $[x/(100+x)*100]\%$

Choose the correct answer from the options given below:

(1) A-IV, B-II, C-III, D-I

(2) A-I, B-III, C-II, D-IV

(3) A-II, B-IV, C-I, D-III

(4) A-III, B-I, C-IV, D-II

(1) 1

(2) 2

(3) 3

(4) 4 (Chosen option)

Question No.54 (Question Id - 137041)

Marks: 4.00

Currently who is the Chaiman of NITI Aayog?

(1)Rajnath Singh

(2)Nirmala Sitaraman

(3)Narendra Modi

(4)Amit Shah

(1) 1

(2) 2

(3) 3 (Chosen option)

(4) 4

Question No.55 (Question Id - 137017)

Marks: 4.00

Which one is the first country in the world to implement GST?

(1)India

(2)U K

(3)Canada

(4)France

(1) 1

(2) 2

(3) 3

(4) 4

Question No.56 (Question Id - 137105)

Marks: 4.00

There is 60% increase in an amount in 6 years at the rate of simple interest. What will be the compound interest of Rs. 12000 after 3 years at the same rate?

(1)Rs. 2160

(2)Rs. 3120

(3)Rs. 3972

(4)Date inadequate

(1) 1

(2) 2

(3) 3

(4) 4

Question No.57 (Question Id - 137011)

Marks: 4.00

The role of abscisic acid (ABA) in a plant is

- (1) Growth inhibition
- (2) Fruit ripening
- (3) Opening of stomata
- (4) Growth promotion

- (1) 1
- (2) 2 (Chosen option)
- (3) 3
- (4) 4

Question No.58 (Question Id - 137078)

Marks: 4.00

If

- (i) P is taller than Q
 - (ii) R is shorter than P
 - (iii) S is taller than T but shorter than Q
 - (iv) T is taller than R
- then who among them is the shortest?

- (1) R
- (2) Q
- (3) S
- (4) T

- (1) 1
- (2) 2
- (3) 3
- (4) 4

Question No.59 (Question Id - 137020)

Marks: 4.00

Who presided over the Lahore session of Congress 1929 in which the demand for Poorna Swaraj was raised?

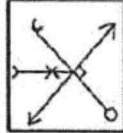
- (1) S.C. Bose
- (2) J.L. Nehru
- (3) Motilal Nehru
- (4) Madan Mohan Malviya

- (1) 1
- (2) 2 (Chosen option)
- (3) 3
- (4) 4

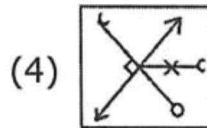
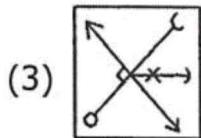
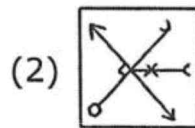
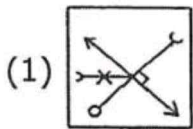
Question No.60 (Question Id - 137081)

Marks: 4.00

If we place a mirror perpendicular to the right of the given figure, then select the mirror image of the figure



Choose the most appropriate answer from the options given below:



- (1) 1
- (2) 2 (Chosen option)
- (3) 3
- (4) 4

Question No.61 (Question Id - 137029)

Marks: 4.00

The Mughal rulers according to their reign

- A. Akbar
- B. Babur
- C. Shahjahan
- D. Farrukh Siyar

Choose the correct answer from the options given below:

(1) A, D, C, B

(2) D, C, B, A

(3) B, A, D, C

(4) B, A, C, D

- (1) 1
- (2) 2
- (3) 3
- (4) 4 (Chosen option)

Question No.62 (Question Id - 137028)

Marks: 4.00

The Chinese travellers who came to India in ancient period (from earliest to later)

- A. I-tsing
- B. Hiuen-tsang
- C. Fahein
- D. Hwi-li

Choose the correct answer from the options given below:

(1) A, B, C,

(2) B, C, D

(3) C, B, A

(4) C, B, D

- (1) 1
- (2) 2
- (3) 3
- (4) 4

Question No.63 (Question Id - 137038)

Marks: 4.00

The custom prohibiting woman of menstruating years from entering in temple was declared unconstitutional in the case of:

(1) Indian Lawyers Association V. State of Kerala

(2) Keshavanand Bharti V. State of Kerala

(3) Justice KS Puttuswamy V. Union of India

(4) K.K. Venugopal v. State of Kerala

- (1) 1 (Chosen option)
- (2) 2
- (3) 3
- (4) 4

Question No.64 (Question Id - 137107)

Marks: 4.00

The side of a square is equal to the side of an equilateral triangle. The ratio of their areas is

(1) 4:03

(2) $2 : \sqrt{3}$

(3) $4 : \sqrt{3}$

(4) 3:04

- (1) 1
(2) 2
(3) 3 (Chosen option)
(4) 4

Question No.65 (Question Id - 137019)

Marks: 4.00

Who was the Viceroy of India during the first partition of Bengal in 1905?

(1) Lord Dalhousie

(2) Lord Curzon

(3) Lord Minto

(4) Lord Lytton

- (1) 1
(2) 2 (Chosen option)
(3) 3
(4) 4

Question No.66 (Question Id - 137065)

Marks: 4.00

By which amendment in the Constitution of India the provisions relating to the Panchayat were inserted?

(1) 72nd Constitution Amendment Act

(2) 73rd Constitution Amendment Act

(3) 74th Constitution Amendment Act

(4) 92nd Constitution Amendment Act

- (1) 1
(2) 2 (Chosen option)
(3) 3
(4) 4

Question No.67 (Question Id - 137093)

Marks: 4.00

Given below are two Statements: one is labelled as Assertion A and the other is labelled as Reason R

Assertion A: If $2x^2 - 7xy + 3y^2 = 0$, then the value of $x:y$ is 3:1 or 1:2.

Reason R: If $a:b = c:d$, then d is called the fourth proportional to a, b, c .

In the light of the above statements, choose the most appropriate answer from the options given below

- (1) Both A and R are correct and R is the correct explanation of A
- (2) Both A and R are correct and R is NOT the correct explanation of A
- (3) A is correct but R is not correct
- (4) A is not correct but R is correct

- (1) 1 (Chosen option)
- (2) 2
- (3) 3
- (4) 4

Question No.68 (Question Id - 137119)

Marks: 4.00

A man invested Rs. 1552 in a stock at 97 to obtain an income of Rs. 128. The dividend from the stock is

- (1) 7.50%
- (2) 8%
- (3) 9.70%
- (4) None of these

- (1) 1
- (2) 2
- (3) 3
- (4) 4

Question No.69 (Question Id - 137040)

Marks: 4.00

The book titled "Theft of India" has been written by:

(1) Roy Moxham

(2) Vikram Sood

(3) William Dalrymple

(4) R.N. Kao

(1) 1

(2) 2

(3) 3

(4) 4

Question No.70 (Question Id - 137063)

Marks: 4.00

Which of the following authority can regulate the rights in respect of acquisition and termination of citizenship?

(1) Union Parliament

(2) State Legislature

(3) Panchayat

(4) Prime Minister

(1) 1 (Chosen option)

(2) 2

(3) 3

(4) 4

Question No.71 (Question Id - 137010)

Marks: 4.00

Which of the following is true about Kingdom protista

- A. They are unicellular
- B. They are multicellular
- C. They are prokaryotic
- D. They are Eukaryotic
- E. They have naked seeds

Choose the correct answer from the options given below:

(1) A and C only

(2) A and D only

(3) D and E only

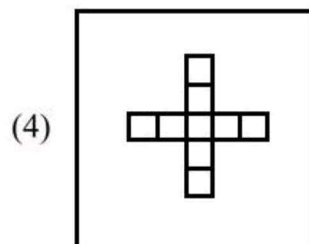
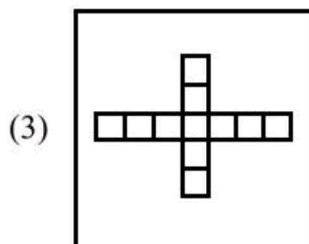
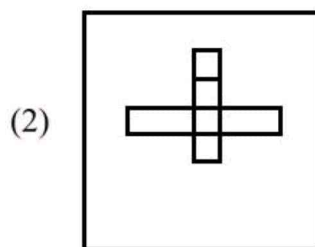
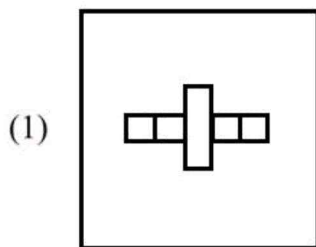
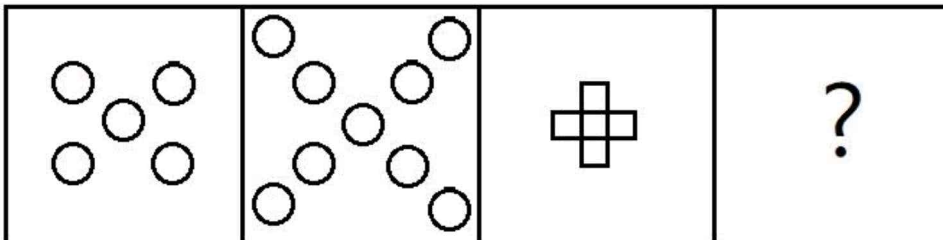
(4) B and C only

- (1) 1
- (2) 2
- (3) 3
- (4) 4

Question No.72 (Question Id - 137086)

Marks: 4.00

Replace the question mark (?) by appropriate figure



- (1) 1
- (2) 2

(3) 3

(4) 4 (Chosen option)

Question No.73 (Question Id - 137044)

Marks: 4.00

Given below are two Statements: one is labelled as Assertion A and the other is labelled as Reason R

Assertion A:

'X' with intention to cause wrongful loss to 'B' removed Rs.10/- from 'B' pocket without consent. 'X' committed the offence of theft.

Reason R:

Dishonest removal of moveable property from the possession amounts to theft.

In the light of the above statements, choose the most appropriate answer from the options given below

(1) Both A and R are correct and R is the correct explanation of A

(2) Both A and R are correct and R is NOT but correct explanation of A

(3) A is correct but R is not correct

(4) A is not correct but R is correct

(1) 1 (Chosen option)

(2) 2

(3) 3

(4) 4

Question No.74 (Question Id - 137069)

Marks: 4.00

When the security of India is threatened, the National Emergency can be proclaimed on which of the following grounds?

A. War

B. External aggression

C. Armed Rebellion

D. Political Unrest

(1) A and B

(2) B and D

(3) A, B, and C

(4) A, C and D

(1) 1

(2) 2

(3) 3 (Chosen option)

(4) 4

Question No.75 (Question Id - 137013)

Marks: 4.00

RT-PCR stands for:

- (1) Reverse transcription-Progressive chain reaction
- (2) Reverse transcription-Protein chain reaction
- (3) Reverse transcription-Polymerase chain reaction
- (4) Reverse transcription-Primase chain reaction

- (1) 1
- (2) 2
- (3) 3
- (4) 4

Question No.76 (Question Id - 137101)

Marks: 4.00

If a cuboid with length = 10 cm, breath = 3 cm and height = 8 cm is cut into small cubes of edge 2 cm each then number of smaller cubes is

- (1) 60
- (2) 40
- (3) 80
- (4) 100

- (1) 1 (Chosen option)
- (2) 2
- (3) 3
- (4) 4

Question No.77 (Question Id - 137118)

Marks: 4.00

Speed of a boat in still water is 10 km/hr. If it can travel 26 km downstream and 14 km upstream in the same time, the speed of the stream is?

- (1) 2.5 km/hr
- (2) 6 km/hr
- (3) 4 km/hr
- (4) 3 km/hr

- (1) 1
- (2) 2
- (3) 3

(4) 4

Question No.78 (Question Id - 137025)

Marks: 4.00

The busiest sea route of the world is

- (1) North Atlantic sea route
- (2) South Atlantic sea route
- (3) North Pacific sea route
- (4) Cape of Good Hope Route

- (1) 1
- (2) 2
- (3) 3
- (4) 4 (Chosen option)

Question No.79 (Question Id - 137021)

Marks: 4.00

Which of the following leaders died due to the injuries sustained during a protest demonstration against simmon commission?

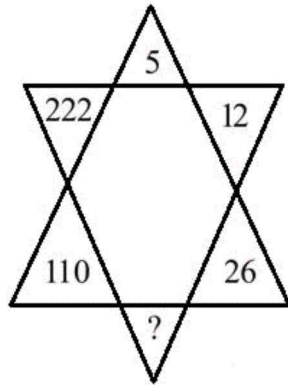
- (1) Bal Gangadhar Tilak
- (2) Bipin Chandra Pal
- (3) Lala Lajpat Rai
- (4) Lala Hardayal

- (1) 1
- (2) 2
- (3) 3 (Chosen option)
- (4) 4

Question No.80 (Question Id - 137079)

Marks: 4.00

Find the missing number in the following figure



(1) 54

(2) 51

(3) 48

(4) 44

(1) 1 (Chosen option)

(2) 2

(3) 3

(4) 4

Question No.81 (Question Id - 137095)

Marks: 4.00

Capacity of each bucket is 13.5 litres. 12 such buckets of water required to fill a tank. How much buckets will be needed to fill the same tank, if the capacity of each bucket is 9.0 litres?

(1) 8

(2) 15

(3) 16

(4) 18

(1) 1

(2) 2

(3) 3

(4) 4 (Chosen option)

Question No.82 (Question Id - 137012)

Marks: 4.00

Dolphins, seals and sea cows are:

- (1) Pisces
- (2) Amphibians
- (3) Aves
- (4) Mammals

- (1) 1
- (2) 2
- (3) 3
- (4) 4 (Chosen option)

Question No.83 (Question Id - 137053)

Marks: 4.00

Ganga Gram Yojna was launched to:

- (1) Develop villages on the banks of Ganga
- (2) Develop cities on the banks of Ganga
- (3) Develop smart villages on the banks of Ganga
- (4) Develop factory free zone on the banks of Ganga

- (1) 1
- (2) 2
- (3) 3 (Chosen option)
- (4) 4

Question No.84 (Question Id - 137102)

Marks: 4.00

There is a square field of area S sq.m. A cylindrical ditch of radius 7 meters and depth 2 meters is dug and the earth this taken out is spread over the remaining part of the square field, the height of which goes up by 0.77 meters. What is the value of S ?

- (1) 426 sq.m
- (2) 520 sq.m
- (3) 455 sq.m
- (4) 554 sq.m

- (1) 1
- (2) 2
- (3) 3

(4) 4

Question No.85 (Question Id - 137083)

Marks: 4.00

An Oasis always has

(1) Travelers

(2) Water

(3) Sand

(4) Forests

(1) 1

(2) 2 (Chosen option)

(3) 3

(4) 4

Question No.86 (Question Id - 137037)

Marks: 4.00

The term 'cause causans' means:

(1) Remote cause

(2) Immediate cause

(3) Without cause

(4) Cause of nothing

(1) 1

(2) 2

(3) 3 (Chosen option)

(4) 4

Question No.87 (Question Id - 137087)

Marks: 4.00

Arrange following in a logical sequence of words (Special to general)

A-Family, B-Member, C-Community, D-Area, E-Country

(1) C, A, B, D, E

(2) C, A, D, B, E

(3) B, A, D, C, E

(4) C, A, D, E, B

(1) 1

(2) 2

- (3) 3 (Chosen option)
(4) 4

Question No.88 (Question Id - 137047)

Marks: 4.00

Given below are two Statements: one is labelled as Assertion A and the other is labelled as Reason R

Assertion A:

'A' stores huge quantity of water on his field for irrigation. Due to leakage, water spread in adjoining area and caused damage to property of 'B' kept there. 'A' will not be liable.

Reason R:

Whoever makes an unnatural use of land and the thing kept escapes without any fault of the person who kept it, such person can be held liable.

In the light of the above statements, choose the most appropriate answer from the options given below

- (1) Both A and R are correct but R is NOT the correct explanation of A
(2) Both A and R are correct and R is the correct explanation of A
(3) A is correct but R is not correct
(4) A is not correct but R is correct

- (1) 1
(2) 2
(3) 3
(4) 4 (Chosen option)

Question No.89 (Question Id - 137006)

Marks: 4.00

A solution turns litmus paper blue. pH of that solution should be

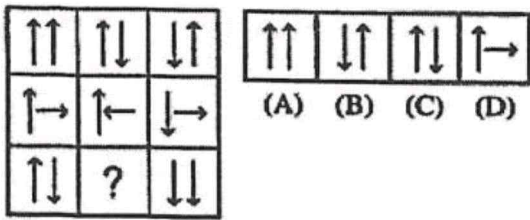
- (1) 1
(2) 4
(3) 6
(4) 10

- (1) 1
(2) 2
(3) 3
(4) 4 (Chosen option)

Question No.90 (Question Id - 137080)

Marks: 4.00

Select a suitable figure from the four alternatives that would complete the figure matrix



(1) (A)

(2) (B)

(3) (C)

(4) (D)

(1) 1

(2) 2 (Chosen option)

(3) 3

(4) 4

Question No.91 (Question Id - 137002)

Marks: 4.00

The book 'Indian Story' focuses on:

(1) Economic History of India

(2) Political History of India

(3) Cultural History of India

(4) Flora and Fauna in India

(1) 1

(2) 2

(3) 3

(4) 4

Question No.92 (Question Id - 137018)

Marks: 4.00

Which of the following is NOT a feature of Oligopoly-?

(1) Small number of sellers

(2) Mutual dependence of firms

(3) Possibility of firm forming cartel

(4) All of these

(1) 1

(2) 2

(3) 3

(4) 4

Question No.93 (Question Id - 137060)

Marks: 4.00

Which of the following expression is not there in the Preamble of the Constitution of India?

(1) Socialist

(2) Secular

(3) Federal

(4) Republic

(1) 1

(2) 2

(3) 3 (Chosen option)

(4) 4

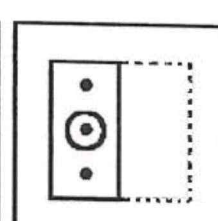
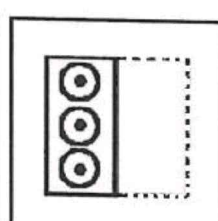
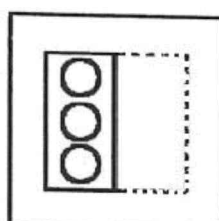

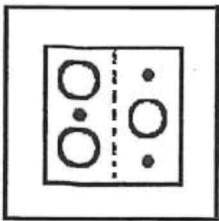
Question No.94 (Question Id - 137076)

Marks:
4.00

Find out from the four alternatives as to how the pattern would appear when the transparent sheet is folded at the dotted line.

Problem Figure

Answer Figure



Transparent Sheet

(A)

(B)

(C)

(D)

(1) (A)

(2) (B)

(3) (C)

(4) (D)

(1) 1

(2) 2

(3) 3 (Chosen option)

(4) 4

Question No.95 (Question Id - 137104)

Marks: 4.00

A sum of money invested at compound interest doubles itself in 6 years. At the same rate of interest, it will amount to eight times of itself in how many years?

(1) 15 years

(2) 12 years

(3) 18 years

(4) 10 years

(1) 1

(2) 2

(3) 3

(4) 4

Question No.96 (Question Id - 137007)

Marks: 4.00

The volume of a 50 gm object is 20 cm^3 . It is put in vessel containing water of density 1 gcm^{-3} . The object will

(1) Float completely above water

(2) Sink partially in water

(3) Sink completely in water

(4) can not be said

(1) 1

(2) 2

(3) 3

(4) 4

Question No.97 (Question Id - 137049)

Marks: 4.00

Given below are two Statements: one is labelled as Assertion A and the other is labelled as Reason R

Assertion A: 'A' was having pain in his intestine. He consulted a Surgeon 'B' who advised for surgery. 'A' agreed for intestinal surgery. During surgery, 'B' also removed one of the kidneys and sold in the market. 'B' will be liable.

Reason R: An act done with the consent does not create liability and, therefore, the Surgeon shall not be liable.

In the light of the above statements, choose the most appropriate answer from the options given below

(1) Both A and R are correct and R is the correct explanation of A

(2) Both A and R are correct and R is NOT the correct explanation of A

(3) A is correct but R is not correct

(4) A is not correct but R is correct

(1) 1

(2) 2

(3) 3 (Chosen option)

(4) 4

Question No.98 (Question Id - 137056)

Marks: 4.00

Project Dhoop was launched to make people aware of:

(1) Vitamin D deficiency

(2) Iodine deficiency

(3) Vitamin A deficiency

(4) Solar Energy

(1) 1 (Chosen option)

(2) 2

(3) 3

(4) 4

Question No.99 (Question Id - 137109)

Marks: 4.00

$2567 \div 17 \times 3 = X + 180$ then X is

(1) 51

(2) 73

(3) 271

(4) 273

- (1) 1
(2) 2
(3) 3
(4) 4 (Chosen option)

Question No.100 (Question Id - 137004)

Marks: 4.00

The Nehru Boat Race Trophy is held in a lake called Punnamda. This lake is in the State of:

(1) Tamil Nadu

(2) Karnataka

(3) Kerala

(4) Telangana

- (1) 1
(2) 2
(3) 3
(4) 4

Question No.101 (Question Id - 137039)

Marks: 4.00

The Forms of Oath or Affirmation is contained in which of the Schedule of the Constitution of India?

(1) V

(2) IV

(3) III

(4) II

- (1) 1
(2) 2
(3) 3 (Chosen option)
(4) 4

Question No.102 (Question Id - 137061)

Marks: 4.00

The Constitution of India vests the power to form a new State in the:

(1) Parliament

(2) State Legislature

(3) President

(4) Governor

- (1) 1 (Chosen option)
(2) 2
(3) 3
(4) 4

Question No.103 (Question Id - 137090)

Marks: 4.00

- (1) 1
(2) 2
(3) 3
(4) 4 (Chosen option)

Question No.104 (Question Id - 137072)

Marks: 4.00

- (1) 1
(2) 2
(3) 3
(4) 4 (Chosen option)

Question No.105 (Question Id - 137117)

Marks: 4.00

- (1) 1
(2) 2
(3) 3
(4) 4

Question No.106 (Question Id - 137091)

Marks: 4.00

- (1) 1
(2) 2
(3) 3
(4) 4

Question No.107 (Question Id - 137052)

Marks: 4.00

- (1) 1
(2) 2
(3) 3
(4) 4

Question No.108 (Question Id - 137096)

Marks: 4.00

- (1) 1 (Chosen option)
(2) 2
(3) 3
(4) 4

Question No.109 (Question Id - 137106)

Marks: 4.00

- (1) 1 (Chosen option)
(2) 2
(3) 3
(4) 4

Question No.110 (Question Id - 137008)

Marks: 4.00

- (1) 1
(2) 2
(3) 3
(4) 4

Question No.111 (Question Id - 137046)

Marks: 4.00

Given below are two Statements: one is labelled as Assertion A and the other is labelled as Reason R

Assertion A:

'A' opened a coaching centre for mathematics students of class XII. He was having good earnings from the Centre. After some time, 'B' also opened a coaching centre just in front of A's centre and started giving tuition to mathematics students of class XII at a cheaper fee. The earnings of 'A' reduced considerably. 'B' will not be held liable for loss to 'A'.

Reason R:

'B' did not cause legal injury to 'A' by opening his centre.

In the light of the above statements, choose the most appropriate answer from the options given below

- (1) Both A and R are correct and R is the correct explanation of A
(2) Both A and R are correct but R is NOT the correct explanation of A
(3) A is correct but R is not correct
(4) A is not correct but R is correct

- (1) 1 (Chosen option)
(2) 2
(3) 3
(4) 4

Question No.112 (Question Id - 137027)

Marks: 4.00

Name the four Vedas Chronologically

- A. Sama Veda
- B. Yajur Veda
- C. Rig Veda
- D. Atharva Veda

Choose the correct answer from the options given below:

(1) A, B, C, D

(2) D, C, B, A

(3) C, B, D, A

(4) C, B, A, D

- (1) 1
- (2) 2
- (3) 3
- (4) 4 (Chosen option)

Question No.113 (Question Id - 137036)

Marks: 4.00

The term 'animus deserendi' means:

(1) Intention to possess

(2) Intension to desert

(3) Intention of ownership

(4) Animal roaming in street

- (1) 1
- (2) 2 (Chosen option)
- (3) 3
- (4) 4

Question No.114 (Question Id - 137001)

Marks: 4.00

The National Commission for Backward Classes started its functioning in the year 1993 but Constitutional status was given in the year:

(1) 1998

(2) 2003

(3) 2014

(4) 2017

- (1) 1
(2) 2
(3) 3
(4) 4 (Chosen option)

Question No.115 (Question Id - 137054)

Marks: 4.00

The major reason for winter pollution in Delhi and surrounding area is:

(1) Vehicular Pollution

(2) Stubble Burning

(3) Dust condensation

(4) Excessive ultra violet rays

- (1) 1
(2) 2
(3) 3 (Chosen option)
(4) 4

Question No.116 (Question Id - 137057)

Marks: 4.00

National Commission for Safai Karmcharis in India was constituted in year:

(1) 1992

(2) 1994

(3) 2015

(4) 2018

- (1) 1
(2) 2
(3) 3
(4) 4

Question No.117 (Question Id - 137030)

Marks: 4.00

Place these organizations according to their year of establishment

- A. Arya Samaj
- B. Brahmo Samaj
- C. Rama Krishna Mission
- D. Prarthan Samaj

Choose the correct answer from the options given below:

(1) B, D, A, C

(2) B, D, C, A

(3) D, C, A, B

(4) A, B, C, D

- (1) 1 (Chosen option)
- (2) 2
- (3) 3
- (4) 4

Question No.118 (Question Id - 137110)

Marks: 4.00

A can run a kilometer race in $4\frac{1}{2}$ min while B can run same race in 5 min. How many meters start can A give B in a kilometer race, so that the race may end in a dead heat?

(1) 150 m

(2) 125 m

(3) 130 m

(4) 100 m

- (1) 1
- (2) 2
- (3) 3
- (4) 4

Question No.119 (Question Id - 137059)

Marks: 4.00

Abbreviation FIPB stands for:

- (1) Foreign Import Promotion Board
- (2) Forest Improvement Public Bodies
- (3) Foreign Investment Promotion Board
- (4) Foreign Immigration Prohibition Bodies

- (1) 1
- (2) 2
- (3) 3 (Chosen option)
- (4) 4

Question No.120 (Question Id - 137111)

Marks: 4.00

How many words can be formed from the letters of the word DIRECTOR, such that the vowels are taken together?

- (1) 2100
- (2) 2300
- (3) 2160
- (4) 2500

- (1) 1
- (2) 2
- (3) 3
- (4) 4

SECTION 2 - ENGLISH

Question No.1 (Question Id - 137127)

Marks: 4.00

Read the below given statement.

The food was too hot to eat.

This statement can be rewritten as:

- (1) The food was hot enough that we could eat it
- (2) The food was not so hot that we could eat it
- (3) The food was so hot that we couldn't eat it
- (4) The food was not hot that we couldn't eat it.

- (1) 1
- (2) 2

- (3) 3 (Chosen option)
(4) 4

Question No.2 (Question Id - 137138)

Marks: 4.00

Read the statement given below and choose an option from the list that comes closest to its meaning:

He is very economical.

(1) He has studied economics as a subject

(2) He avoids extravagance

(3) He is a spendthrift

(4) None of the above

- (1) 1
(2) 2
(3) 3 (Chosen option)
(4) 4

Question No.3 (Question Id - 137150)

Marks: 4.00

Given below are two statements:

Statement I: A bevy of girls and a bouquet of flowers.

Statement II: A bunch of keys and a swarm of monkeys.

In the light of the above statements, choose the most appropriate answer from the options given below

(1) Both Statement I and Statement II are correct

(2) Both Statement I and Statement II are incorrect

(3) Statement I is correct but Statement II is incorrect

(4) Statement I is incorrect but Statement II is correct

- (1) 1 (Chosen option)
(2) 2
(3) 3
(4) 4

Question No.4 (Question Id - 137122)

Marks: 4.00

Sandy got married when she was.... 16, and now, at the age of 36, she isa grandmother.

(1) Still / Anymore

(2) However / As

(3) Despite / No longer

(4) Barely / Already

(1) 1

(2) 2

(3) 3

(4) 4 (Chosen option)

Question No.5 (Question Id - 137141)

Marks: 4.00

Form a correct sentence using the stems given below:

A. I know

B. who built

C. The man

D. The

E. house

Choose the correct answer from the options given below:

(1) ABCED

(2) DACBE

(3) ACBDE

(4) BDAEC

(1) 1

(2) 2

(3) 3 (Chosen option)

(4) 4

Question No.6 (Question Id - 137139)

Marks: 4.00

Choose from the four options the one that best expresses the meaning of the given idiom:

Face the music

(1) Get finished

(2) Feel sad

(3) Enjoy the music

(4) Get reprimanded

(1) 1

(2) 2

(3) 3

(4) 4 (Chosen option)

Question No.7 (Question Id - 137143)

Marks: 4.00

Complete the given sentence by choosing one of the options given below:

_____ 50 species of birds have been found in this forest.

(1) As much as

(2) much as

(3) As many

(4) As many as

(1) 1 (Chosen option)

(2) 2

(3) 3

(4) 4

Question No.8 (Question Id - 137135)

Marks: 4.00

Select, from the alternatives, the word having opposite meaning to the given word:

Impeach

(1) Disgrace

(2) Criticise

(3) Punish

(4) Praise

(1) 1

(2) 2

- (3) 3
(4) 4 (Chosen option)

Question No.9 (Question Id - 137128)

Marks: 4.00

Read the below statement and fill in the blanks with the suitable option given.

I like your house. How long _____ here?

- (1) do you live
(2) have you lived
(3) have you been lived
(4) have you living

- (1) 1
(2) 2 (Chosen option)
(3) 3
(4) 4

Question No.10 (Question Id - 137133)

Marks: 4.00

Identify the part of the sentence given below having an error in it:

- (1) This was one of the reason
(2) why the rural India
(3) could not develop
(4) as per our expectations

- (1) 1
(2) 2 (Chosen option)
(3) 3
(4) 4

Question No.11 (Question Id - 137129)

Marks: 4.00

Match List - I with List - II

List I

List II

- | | |
|---------------|--------------------------------|
| A. I have | (I) I can't come to the party. |
| B. She | (II) was built ten years ago. |
| C. The hotel | (III) want to go home? |
| D. Why do you | (IV) lost my keys. |

(1) A-III, B-II, C-IV, D-I

(2) A-IV, B-III, C-I, D-II

(3) A-IV, B-I, C-II, D-III

(4) A-I, B-II, C-III, D-IV

- (1) 1
- (2) 2
- (3) 3 (Chosen option)
- (4) 4

Question No.12 (Question Id - 137148)

Marks: 4.00

Given below are two statements:

Statement I: She is a doctor, isn't she?

Statement II: you can sing very well, can't you?

In the light of the above statements, choose the most appropriate answer from the options given below

(1) Both Statement I and Statement II are correct

(2) Both Statement I and Statement II are incorrect

(3) Statement I is correct but Statement II is incorrect

(4) Statement I is incorrect but Statement II is correct

- (1) 1 (Chosen option)
- (2) 2
- (3) 3
- (4) 4

Question No.13 (Question Id - 137142)

Marks: 4.00

Form a correct sentence using the stems given below:

- A. Can
- B. Me what
- C. He
- D. Requires
- E. You tell

Choose the correct answer from the options given below:

(1) AEBCD

(2) DBECA

(3) BCDAE

(4) CDEAB

- (1) 1 (Chosen option)
- (2) 2
- (3) 3
- (4) 4

Question No.14 (Question Id - 137134)

Marks: 4.00

Which of the four options given below can best express the meaning of the idiom to have an axe to grind?

(1) to work incessantly

(2) to criticise someone

(3) to do something for selfish end

(4) to be idle

- (1) 1
- (2) 2 (Chosen option)
- (3) 3
- (4) 4

Question No.15 (Question Id - 137149)

Marks: 4.00

Given below are two statements:

Statement I: The dog is a faithful animal.

Statement II: "Faithful" is an adjective.

In the light of the above statements, choose the most appropriate answer from the options given below

- (1) Both Statement I and Statement II are correct
- (2) Both Statement I and Statement II are incorrect
- (3) Statement I is correct but Statement II is incorrect
- (4) Statement I is incorrect but Statement II is correct

- (1) 1 (Chosen option)
- (2) 2
- (3) 3
- (4) 4

Question No.16 (Question Id - 137123)

Marks: 4.00

Fill in the blanks.

In Turkey, people can now buy as much foreign currency as they like, It was not always.....

- (1) Yet / Too
- (2) So / Already
- (3) Thus / Yet
- (4) But / So

- (1) 1
- (2) 2
- (3) 3
- (4) 4 (Chosen option)

Question No.17 (Question Id - 137136)

Marks: 4.00

Out of the four options choose the one that can be substituted for the words given below:

One who cannot be corrected

(1) Obedient

(2) manageable

(3) incorrigible

(4) correctable

- (1) 1
(2) 2
(3) 3 (Chosen option)
(4) 4

Question No.18 (Question Id - 137125)

Marks: 4.00

Fill in the blanks.

He has been absent _____ classes for three days.

(1) To

(2) Within

(3) From

(4) For

- (1) 1
(2) 2
(3) 3
(4) 4 (Chosen option)

Question No.19 (Question Id - 137147)

Marks: 4.00

Look at the relationship between the given pair of words and then select, from the alternatives, the pair having similar relationship:

Always:Never::

(1) constantly: Frequently

(2) Often: Rarely

(3) Casually: Intermittently

(4) Frequently: Occasionally

- (1) 1

- (2) 2 (Chosen option)
(3) 3
(4) 4

Question No.20 (Question Id - 137132)

Marks: 4.00

Fill in the blanks.

_____ anyone know where I left my book?

(1) Do

(2) Does

(3) Has

(4) Who

- (1) 1
(2) 2 (Chosen option)
(3) 3
(4) 4

Question No.21 (Question Id - 137145)

Marks: 4.00

Fill in the blank with the appropriate word given in the options:

The atmosphere was _____ with the scent of rose flowers.

(1) Flagrant

(2) Fragment

(3) Awful

(4) Fragrant

- (1) 1
(2) 2
(3) 3
(4) 4 (Chosen option)

Question No.22 (Question Id - 137144)

Marks: 4.00

Choose the odd one out:

(1) Leo

(2) Cancer

(3) Taurus

(4) Zoom

(1) 1

(2) 2

(3) 3

(4) 4 (Chosen option)

Question No.23 (Question Id - 137137)

Marks: 4.00

Fill in the blank with the appropriate phrasal verb:

They were so tired that they _____ the moment they reached home.

(1) Broke off

(2) Broke out

(3) Broke in

(4) Broke away

(1) 1 (Chosen option)

(2) 2

(3) 3

(4) 4

Question No.24 (Question Id - 137130)

Marks: 4.00

Fill in the blanks.

I wish I _____ wasted my time.

(1) Had been

(2) Have

(3) Have not

(4) Has been

(1) 1

(2) 2

(3) 3 (Chosen option)

(4) 4

Question No.25 (Question Id - 137131)

Marks: 4.00

Fill in the blank with appropriate phrasal verb:

If you want to hear the news, you can _____ the radio

(1) Turn out

(2) Turn up

(3) Turn in

(4) Turn on

- (1) 1
(2) 2
(3) 3
(4) 4 (Chosen option)

Question No.26 (Question Id - 137140)

Marks: 4.00

One part of the following sentence has an error in it. Identify it.

(1) No sooner did/

(2) I enter the train,/

(3) then it/

(4) started moving

- (1) 1 (Chosen option)
(2) 2
(3) 3
(4) 4

Question No.27 (Question Id - 137124)

Marks: 4.00

Fill in the blank with the appropriate phrasal verb: They have _____ on a journey round the world.

(1) Set off

(2) Set in

(3) Set about

(4) Set for

- (1) 1
(2) 2
(3) 3
(4) 4

Question No.28 (Question Id - 137146)

Marks: 4.00

Fill in the blank with the appropriate phrasal verb:

The teacher _____ the names of the students.

(1) called up

(2) called out

(3) called on

(4) called by

(1) 1 (Chosen option)

(2) 2

(3) 3

(4) 4

Question No.29 (Question Id - 137121)

Marks: 4.00

Fill in the blanks.

The _____ moment I have ever experienced was when I saw my one year old son sitting on the windowsill of our flat on the third floor.

(1) As terrified as

(2) Too terrifying

(3) A more terrified

(4) Most terrifying

(1) 1

(2) 2

(3) 3

(4) 4 (Chosen option)

Question No.30 (Question Id - 137126)

Marks: 4.00

Fill in the blank with appropriate word given in the options:

Religious minorities have been _____ for their beliefs throughout history

(1) Pressed

(2) Persecuted

(3) Prosecuted

(4) Penalized

(1) 1

- (2) 2
- (3) 3
- (4) 4

Save & Print